










Year 5
Summer Term 2 Homework Schedule

Daily home reading with an adult, of at least 10 minutes, is proven to have an impact on children’s development and attainment within school. Times tables: All tables from 1 to 12 with their corresponding division facts.				Peer’s Comment	Parent’s Comment	Teacher’s Comment
Week	Home Learning: Topic – Performance Science – Material Changes	Arithmetic	Spelling Spelling Shed			
Set: 8 ^h June Due: 15 th June	Create a Factfile on Shakespeare. Please include: <ul style="list-style-type: none"> - Date of Birth - Where he was born - Why he was significant - His main achievements - Any additional information  <p>Challenge: How did Shakespeare influence the English language?</p>	Complete a MTC and write your score here: _____ Practise any which you got incorrect. Arithmetic 50,000+500= 60,000-200= 50,000-5000= 70,000-4000= 10,000-700= Challenge: 448,193+4993= 183942+8362= 562872-4982= 580277-4778=	List 27: Gussed Guest Heard Herd Morning Mourning Past Passed Bridal Bridle			
Set: 15 th June Due: 22 nd June	Conduct the ‘Does it dissolve?’ experiment. You will need: <ul style="list-style-type: none"> - 5 substances to test (e.g. salt, coffee) - Beaker - Spoon - Timer - Warm water (tap) - Sieve 	Complete a MTC and write your score here: _____ Practise any which you got incorrect. Arithmetic 4.5+2.6= 7.3+7.5=	List 28: Cereal Serial Complement Compliment Principal Principle Stationary Stationery Wary Weary			

	<p>Method: Step 1: Half fill the beaker with hot water. Step 2: Add 1 spoonful of the substance you are testing and stir for 3 minutes. Step 3: Observe the solution carefully. Can you see any of the substance remaining? Is the solution transparent (see-through)? Step 4: Record your observations into the table. Step 5: Empty and rinse your beaker through the sieve and into the bucket. Step 6: Repeat steps 1 to 4 for all remaining substances.</p> <p>Challenge: How did you make it a fair test?</p>	$1.6+2.4=$ $3.7-1.5=$ $7.7-4.6=$ $9.1-3.5=$ Challenge: $9.31+1.9=$ $3.76+6.5=$ $3.32+2.456=$ $5.62-3.80=$				
Set: 22 nd June Due: 29 th June	Research and Create your own Tudor Recipe. Please include: <ul style="list-style-type: none"> - Name - Ingredients - Amounts - Pictures  <p>Challenge: Can you write three sentences describing the taste and appearance.</p>	Complete a MTC and write your score here: _____ Practise any which you got incorrect. 432 divided by 9 4675 divided by 5 902 +100 723 – 80 7.3 – 3.76 142 x 21 9117 x 43	List 29: Affect Effect Precede Proceed Draft Draught Dessert Desert Whose Who’s			
Set: 29 th June Due: 6 th July	Create a Factfile on Michael Morpurgo (author of Kensuke’s Kingdom). Please include: <ul style="list-style-type: none"> - Early Life - His career - Achievements - Fun Facts  <p>Challenge: From your research why do you think Michael Morpurgo was given the position of Children’s Laureate?</p>	Complete a MTC and write your score here: _____ Practise any which you got incorrect. Arithmetic 924 divided by 7= 795 divided by 5= 408 divided by 6= 783 divided by 9= 608 divided by 4=	List 30: Achieve Apparent Bargain Bruise Community Mischievous Muscle Necessary Vehicle System			

		<p>Challenge: 1494 divided by 3= 5838 divided by 8= 9282 divided by 5= 8703.2 divided by 4=</p>				
<p>Set: 6th July Due: 13th July</p>	<p>Identify and List 5 different types of solids, liquids and gases.</p> <div style="display: flex; justify-content: space-around; align-items: flex-start;"> <div style="text-align: center;"> <p>solid</p>  <ul style="list-style-type: none"> ● rigid ● fixed shape ● fixed volume <p>cannot be squashed</p> </div> <div style="text-align: center;"> <p>liquid</p>  <ul style="list-style-type: none"> ● not rigid ● no fixed shape ● fixed volume <p>cannot be squashed</p> </div> <div style="text-align: center;"> <p>gas</p>  <ul style="list-style-type: none"> ● not rigid ● no fixed shape ● no fixed volume <p>can be squashed</p> </div> </div> <p>Challenge: How can you get from a solid to a liquid? What happens to the particles?</p>	<p>Complete a MTC and write your score here: _____</p> <p>Practise any which you got incorrect.</p> <p>Arithmetic 10 x 4.67= 5.92 x 100= 3.39 x 1000= 435 x 10= 691 divided by 10= 704 divided by 100= Challenge: 1000 x 4.82= 3090 divided by 1000= 39.1 x 100= 8.88 x 1000=</p>	<p>List 31: Co-ordinate Co-operate Co-own Co-author Re-enter Re-examine Re-evaluate Re-educate Re-explain Re-energise</p>			
<p>Set: 13th July Due: 20th July</p>	<p>Create a poster about the history of the Tudors. Draw on your knowledge that you have learnt from this half term. Include:</p> <ul style="list-style-type: none"> - Key Figures - Battles - Sea exploration  <p>Challenge: Why did the Tudor dynasty end?</p>	<p>Complete a MTC and write your score here: _____</p> <p>Practise any which you got incorrect.</p> <p>Arithmetic 3squared= 6squared= 11squared= 4cubed=</p>	<p>List 32: Immediate Sincere Changeable Afterwards Referring Knight Doubt Amateur Ancient Deceive</p>			

		5cubed= 10 cubed= Challenge: 14squared= 20squared= 12cubed= 15cubed=				
--	--	---	--	--	--	--