


























































Daily home reading with an adult, of at least 10 minutes, is proven to have an impact on children’s development and attainment within school. Please practice the multiplication times tables and complete Purple Mash assignments, Sum dog games, Ed Shed to revise times tables and maths skills.

Week	Home Learning	Maths focus	This week’s spelling	Peer comment	Teacher comment
Set: 21/04/23 Due: 26/04/23	<p>During our English lessons, we will be studying ‘Into the Forest’ by author Anthony Browne. Can you research this author and find out more information about him?</p> <p>Challenge - Find out more books by this author, which book would you like to read and why?</p>	<p>Write one of these fractions in each answer box: $\frac{1}{3}$ $\frac{1}{4}$ $\frac{1}{2}$ $\frac{3}{4}$</p> <div style="display: flex; justify-content: space-around;"> <div style="border: 1px solid black; padding: 5px; width: 45%;"> <p>1. What fraction of the animals are snakes?</p>  <p style="text-align: right;"><input type="text"/></p> </div> <div style="border: 1px solid black; padding: 5px; width: 45%;"> <p>2. What fraction of the pizza has been eaten?</p>  <p style="text-align: right;"><input type="text"/></p> </div> </div> <div style="display: flex; justify-content: space-around; margin-top: 10px;"> <div style="border: 1px solid black; padding: 5px; width: 45%;"> <p>3. What fraction of the pizza is remaining?</p>  <p style="text-align: right;"><input type="text"/></p> </div> <div style="border: 1px solid black; padding: 5px; width: 45%;"> <p>4. What fraction of the length of the big pencil are the small pencils?</p>  <p style="text-align: right;"><input type="text"/></p> </div> </div>	List 25 teacher stretcher dispatcher catcher butcher	richer scorcher preacher cruncher watcher	
Set: 28/04/23 Due: 03/05/23	<p>This term in science, we are studying plants. Can you make a poster that shows the life cycle of a plant?</p> <p>Challenge - can you draw diagram of a flower and label each part?</p>	 <p style="text-align: center;">Jessie eats $\frac{2}{7}$ of it. James eats $\frac{4}{7}$ of it.</p>  <p style="text-align: center;">As a fraction, how much of the chocolate bar did Jessie and James eat all together?</p>	List 26 scheme chorus echo chemist character	stomach monarch school anchor chaos	
Set: 05/05/23 Due: 10/05/23	<p>The habits we are focusing on this half term are being self-controlled and humble. Choose one and write about a time you have shown this habit.</p> <p>Challenge - choose a family member/ friend and write about how they show these habits.</p>	<p>Find something that is a whole in your house, a cake, bread, toys and divide it into different fractions. Can you divide it into a half, a quarter and a third.</p> <div style="display: flex; justify-content: space-around; align-items: center;"> <div style="border: 1px solid black; padding: 5px; text-align: center;">  $\frac{1}{2}$ </div> <div style="border: 1px solid black; padding: 5px; text-align: center;">  $\frac{1}{4}$ </div> <div style="border: 1px solid black; padding: 5px; text-align: center;">  $\frac{1}{3}$ </div> </div>	List 27 vague league plague tongue fatigue	antique unique grotesque mosque plaque	

<p>Set: 12/05/23 Due: 17/05/23</p>	<p>In history we are looking at the history of the Paralympics. Use your iPad to research the first Wheelchair Games.</p> <p>Challenge - can you write a paragraph about an inspirational sports person you know?</p>	<p>Write the following times in 24-hour time.</p> <p>4pm 12pm 9pm 9am 6:15pm 7pm</p>	<p>List 28 science scene discipline fascinates crescent</p>	<p>scissors ascends scented scenery descend</p>																										
<p>Set: 19/05/23 Due: 24/05/23</p>	<p>In Religious Education children have been looking at the importance of the mosque to Muslims. Research a mosque in the UK and find out where it is located and what activities and events are held there.</p> <p>Challenge – Sketch the mosque and label the different parts of the mosque: minaret, washroom, dome, mihrab, shoe area, Arabic art</p>	<p>Digital and Analogue Clocks Match the different ways of representing the same time.</p> <table border="0"> <tr> <td>half past six</td> <td></td> <td></td> </tr> <tr> <td>quarter past eight</td> <td></td> <td></td> </tr> <tr> <td>nine o'clock</td> <td></td> <td></td> </tr> <tr> <td>quarter to seven</td> <td></td> <td></td> </tr> <tr> <td>quarter past five</td> <td></td> <td></td> </tr> <tr> <td>quarter past ten</td> <td></td> <td></td> </tr> <tr> <td>quarter to ten</td> <td></td> <td></td> </tr> <tr> <td>seven o'clock</td> <td></td> <td></td> </tr> </table>	half past six			quarter past eight			nine o'clock			quarter to seven			quarter past five			quarter past ten			quarter to ten			seven o'clock			<p>List 29 ball bawl berry bury brake</p>	<p>break fair fare mail male</p>		
half past six																														
quarter past eight																														
nine o'clock																														
quarter to seven																														
quarter past five																														
quarter past ten																														
quarter to ten																														
seven o'clock	