













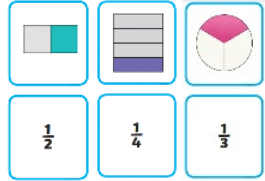
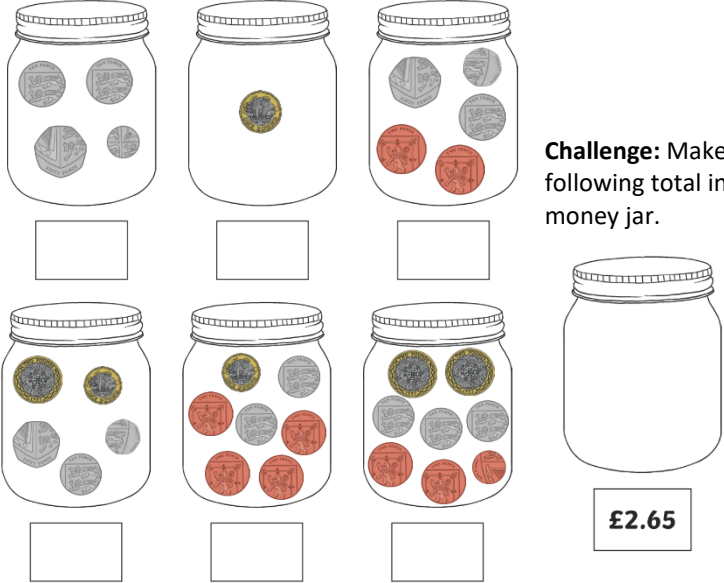


Daily home reading with an adult, of at least 10 minutes, is proven to have an impact on children's development and attainment within school. Please practice the multiplication times tables check, Sumdog, White Rose 1 Minute Maths and Ed Shed to revise times tables, maths skills and spellings.

Week	Home Learning	Maths focus	This week's spelling	Teacher comment				
<p>Set: 19/04/24 Due: 24/04/24</p>	<p>During our English lessons, we will be studying 'Into the Forest' by author Anthony Browne. Can you research this author and find out more information about him?</p> <p>Challenge - Find out more books by this author, which book would you like to read and why?</p>	<p>Practise 3, 4, 8 Times Tables</p> <p>Write one of these fractions in each answer box: $\frac{1}{3}$ $\frac{1}{4}$ $\frac{1}{2}$ $\frac{3}{4}$</p> <table border="1" style="width: 100%; border-collapse: collapse;"> <tr> <td style="width: 50%; padding: 5px;"> <p>1. What fraction of the animals are snakes?</p>  <input style="width: 40px; height: 30px; margin-left: 10px;" type="text"/> </td> <td style="width: 50%; padding: 5px;"> <p>2. What fraction of the pizza has been eaten?</p>  <input style="width: 40px; height: 30px; margin-left: 10px;" type="text"/> </td> </tr> <tr> <td style="width: 50%; padding: 5px;"> <p>3. What fraction of the pizza is remaining?</p>  <input style="width: 40px; height: 30px; margin-left: 10px;" type="text"/> </td> <td style="width: 50%; padding: 5px;"> <p>4. What fraction of the length of the big pencil are the small pencils?</p>  <input style="width: 40px; height: 30px; margin-left: 10px;" type="text"/> </td> </tr> </table>	<p>1. What fraction of the animals are snakes?</p>  <input style="width: 40px; height: 30px; margin-left: 10px;" type="text"/>	<p>2. What fraction of the pizza has been eaten?</p>  <input style="width: 40px; height: 30px; margin-left: 10px;" type="text"/>	<p>3. What fraction of the pizza is remaining?</p>  <input style="width: 40px; height: 30px; margin-left: 10px;" type="text"/>	<p>4. What fraction of the length of the big pencil are the small pencils?</p>  <input style="width: 40px; height: 30px; margin-left: 10px;" type="text"/>	<p>Week 24</p> <p>address arrive certain experience history mention occasionally probably reign sentence</p>	
<p>1. What fraction of the animals are snakes?</p>  <input style="width: 40px; height: 30px; margin-left: 10px;" type="text"/>	<p>2. What fraction of the pizza has been eaten?</p>  <input style="width: 40px; height: 30px; margin-left: 10px;" type="text"/>							
<p>3. What fraction of the pizza is remaining?</p>  <input style="width: 40px; height: 30px; margin-left: 10px;" type="text"/>	<p>4. What fraction of the length of the big pencil are the small pencils?</p>  <input style="width: 40px; height: 30px; margin-left: 10px;" type="text"/>							
<p>Set: 26/04/24 Due: 01/05/24</p>	<p>This term in science, we are studying plants. Can you make a poster that shows the life cycle of a plant?</p> <p>Challenge - Can you draw diagram of a flower and label each part?</p>	<p>Practise 3, 4, 8 Times Tables</p>  <p>Jessie eats $\frac{2}{7}$ of it. James eats $\frac{4}{7}$ of it.</p>  <p>As a fraction, how much of the chocolate bar did Jessie and James eat all together?</p>	<p>Week 25</p> <p>teacher stretcher dispatcher catcher butcher richer scorcher preacher cruncher watcher</p>					

<p>Set: 03/05/24 Due: 08/05/24</p>	<p>The habits we are focusing on this half term are being self-controlled and humble. Choose one and write about a time you have shown this habit.</p> <p>Challenge - Choose a family member/ friend and write about how they show these habits.</p>	<p><u>Practise 3, 4, 8 Times Tables</u></p> <p>Find something that is a whole in your house, a cake, bread, toys and divide it into different fractions. Can you divide it into a half, a quarter and a third.</p>  <p>$\frac{1}{2}$ $\frac{1}{4}$ $\frac{1}{3}$</p>	<p><u>Week 26</u></p> <p>scheme chorus echo chemist character stomach monarch school anchor chaos</p>	
<p>Set: 10/05/24 Due: 15/05/24</p>	<p>In history we are looking at the history of the Paralympics. Use your iPad to research the first Wheelchair Games.</p> <p>Challenge - Can you write a paragraph about an inspirational sportsperson you know?</p>	<p><u>Practise 3, 4, 8 Times Tables</u></p> <p>How much money is in my jar?</p>  <p>Challenge: Make the following total in the money jar.</p> <p>£2.65</p>	<p><u>Week 27</u></p> <p>vague league plague tongue fatigue antique unique grotesque mosque plaque</p>	

















Set: 17/05/24
Due: 22/05/24

In Religious Education children have been looking at the importance of the mosque to Muslims. Research a mosque in the UK and find out where it is located and what activities and events are held there.

Challenge – Sketch the mosque and label the different parts of the mosque: minaret, washroom, dome, mihrab, shoe area, Arabic art

Digital and Analogue Clocks

Match the different ways of representing the same time.

half past six		
quarter past eight		
nine o'clock		
quarter to seven		
quarter past five		
quarter past ten		
quarter to ten		
seven o'clock		

List 28

science
scene
discipline
fascinates
crescent
scissors
ascends
scented
scenery
descend